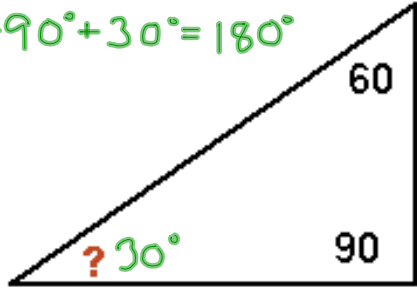
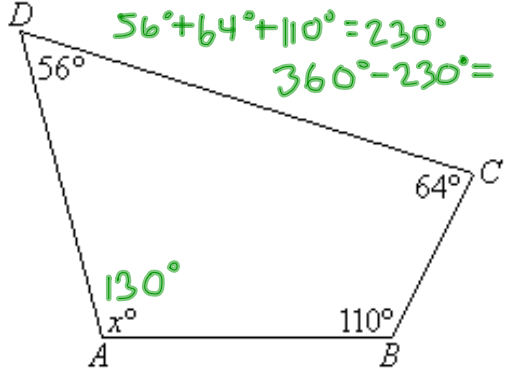
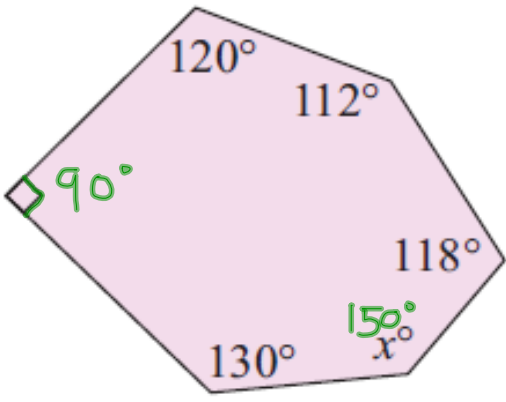


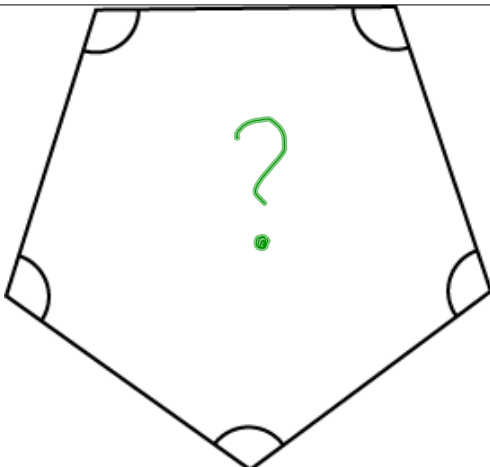
White Board Warm Up

Find the missing angle in each polygon.

$$60^\circ + 90^\circ + 30^\circ = 180^\circ$$


$$56^\circ + 64^\circ + 110^\circ = 230^\circ$$
$$360^\circ - 230^\circ = 130^\circ$$



$$720^\circ - 570^\circ = 150^\circ$$



Handout

Complete the table of values, scatterplot, and conclusion that have been started for you.

Announcement

Test next Thursday and Friday. There will be a ticket on Tuesday to start the review.